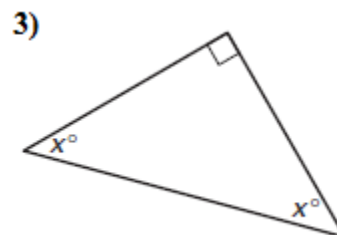
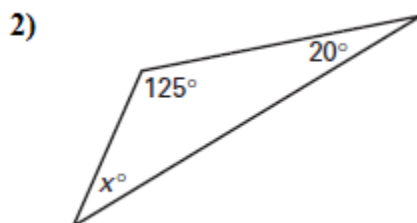
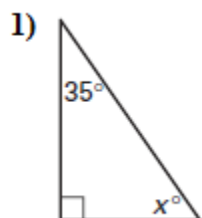


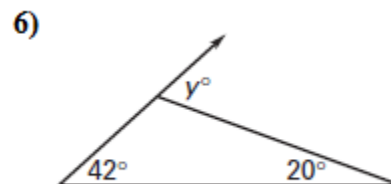
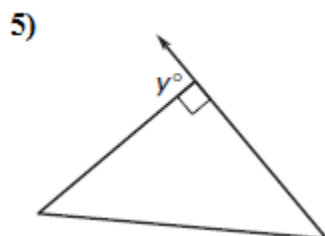
# TARGET 4B

Name \_\_\_\_\_ Date \_\_\_\_\_

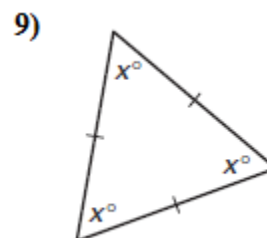
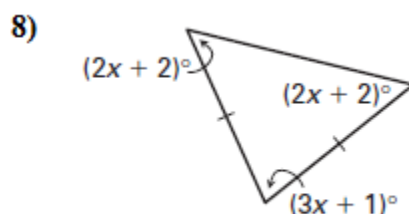
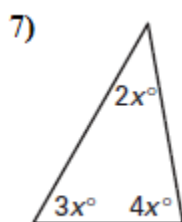
For #1 – 3, find the value of  $x$ .



For #4 – 6, find the value of  $y$ .



For #7 – 9, find the value of  $x$ .



Find the measure of the numbered angle.

10)  $m\angle 1$

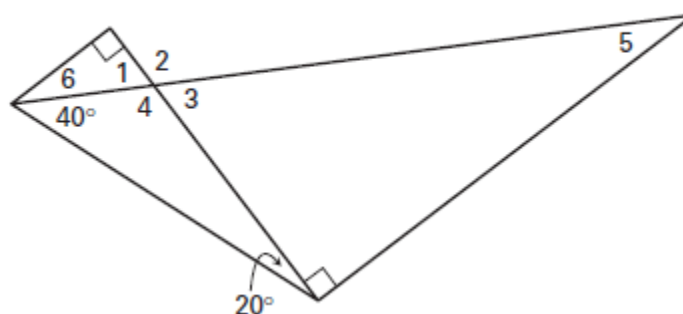
11)  $m\angle 2$

12)  $m\angle 3$

13)  $m\angle 4$

14)  $m\angle 5$

15)  $m\angle 6$



## TARGET 4B ANSWERS

- 1) 55
- 2) 35
- 3) 45
- 4) 158
- 5) 90
- 6) 62
- 7)  $x = 20$
- 8)  $x = 25$
- 9)  $x = 60$
- 10)  $60^\circ$
- 11)  $120^\circ$
- 12)  $60^\circ$
- 13)  $120^\circ$
- 14)  $30^\circ$
- 15)  $30^\circ$